



Represent Number Sentences


Represent the math problems using counters and write the answers. For addition, draw more counters and color them. For subtraction, cross out the correct number of counters.




$$4 - 1 = \underline{\quad}$$




$$4 - 2 = \underline{\quad}$$



$$2 + 3 = \underline{\quad}$$



$$1 + 2 = \underline{\quad}$$



$$5 - 3 = \underline{\quad}$$