



Anchor 5


Count the total number of dots on the ladybug and then fill in the blanks to complete the addition sentence.




$$\boxed{5} + \boxed{} = \boxed{}$$




$$\boxed{5} + \boxed{} = \boxed{}$$




$$\boxed{5} + \boxed{} = \boxed{}$$



$$\boxed{5} + \boxed{} = \boxed{}$$



$$\boxed{5} + \boxed{} = \boxed{}$$



$$\boxed{} + \boxed{} = \boxed{}$$