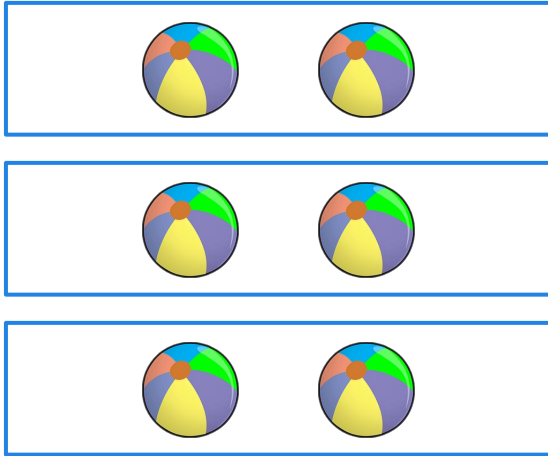


Multiplication Expression

For the given arrays, write an addition expression and hence write a multiplicative expression.

1




Addition expression :

$$\square + \square + \square$$

Multiplication expression :

$$\square \times \square$$

2



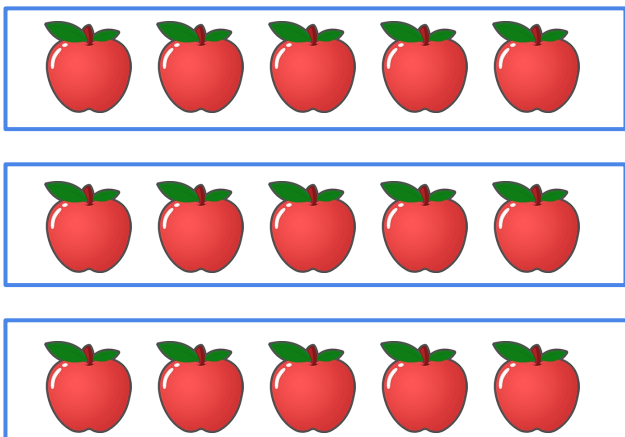
Addition expression :

$$\square + \square + \square$$

Multiplication expression :

$$\square \times \square$$

3



Addition expression :

$$\square + \square + \square$$

Multiplication expression :

$$\square \times \square$$