



## Represent Addition Sentences


Draw more counters and color them blue to represent the addition sentence and then fill in the blanks as shown.




$$4 + \underline{\quad} = 6$$




$$6 + \underline{\quad} = 6$$



$$4 + \underline{\quad} = 7$$



$$3 + \underline{\quad} = 6$$



$$2 + \underline{\quad} = 7$$