














# Analyzing Picture Graphs

Use the given picture graph to answer the questions.

Student's Favorite Fruit	
Apple	    
Mango	 
Orange	   
Pineapple	
<b>Key: Each  represents 1 student.</b>	

How many students like either apple or mango?

How many students like either mango or orange?

How many students like either apple or orange?

How many students like either apple or pineapple?

