


Anchor 10


Write the missing number.




$$10 - 3 = \square$$



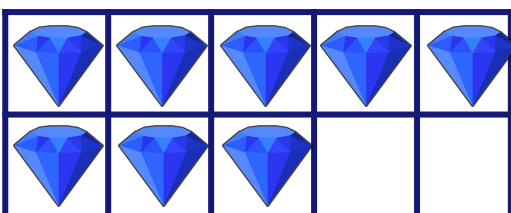
$$10 - \square = 9$$



$$\square - 5 = \square$$



$$10 - \square = \square$$



$$\square - \square = \square$$