



## Anchor 5 & 10

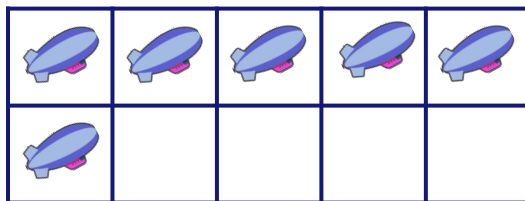
Look at the pictures and fill the missing numbers.



$$5 + \square = 10 - \square$$



$$5 + \square = 10 - \square$$



$$5 + \square = 10 - \square$$