



Anchor 5

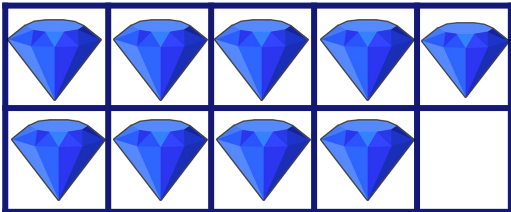
Write the missing number.




$$\boxed{5} + \boxed{1} = \boxed{}$$




$$\boxed{} + \boxed{3} = \boxed{}$$



$$\boxed{5} + \boxed{} = \boxed{}$$



$$\boxed{5} + \boxed{} = \boxed{}$$



$$\boxed{} + \boxed{5} = \boxed{}$$