



Angles in a Shape


Fill in the blanks with the correct number.




A triangle has _____ angles.




A rectangle has _____ angles.



A pentagon has _____ angles.



A hexagon has _____ angles.



A heptagon has _____ angles.

