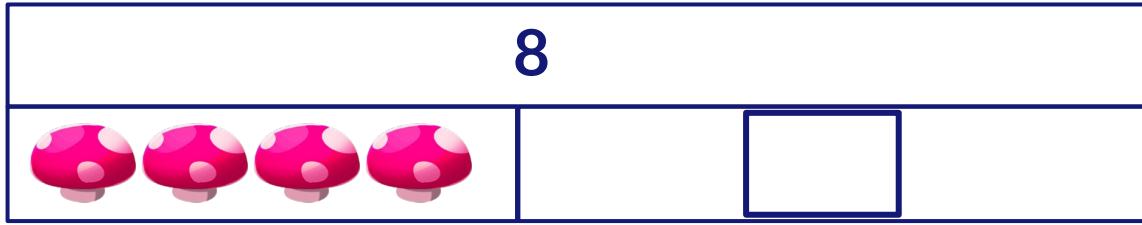


Part-Part-Whole Model

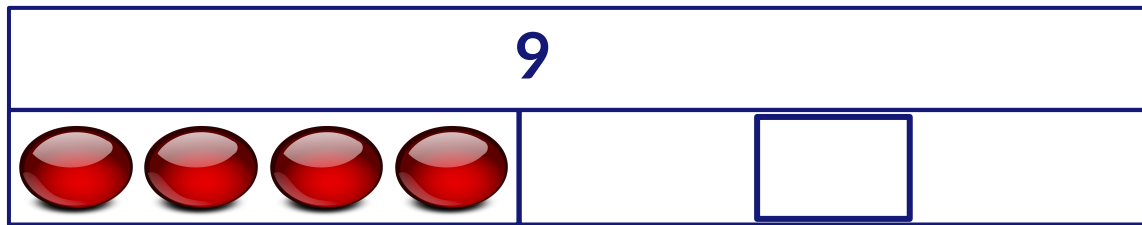
Write the equation and find the answer.

There are 8 vegetables in total. 4 are mushrooms and the rest are pumpkins. How many pumpkins are there? Write the equation and find the answer.




4	+	<input style="width: 20px; height: 20px;" type="text"/>	=	8
---	---	---	---	---

There are 9 marbles in total. 4 are red and the rest are purple. How many purple marbles are there? Write the equation and find the answer.



4	+	<input style="width: 20px; height: 20px;" type="text"/>	=	9
---	---	---	---	---

There are 7 fruits in a basket. 5 are apples and the rest are oranges. How many oranges are there in the basket? Write the equation and find the answer.



5	+	<input style="width: 20px; height: 20px;" type="text"/>	=	7
---	---	---	---	---