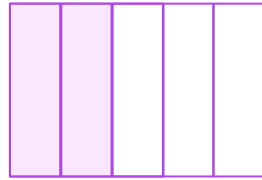


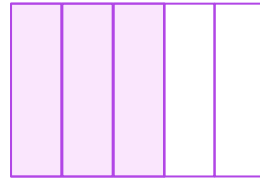
Is the Comparison Correct?

Mark check (✓) or cross (X) in the box to indicate whether the given comparison is correct or not.



$$\frac{2}{5}$$

>



$$\frac{3}{5}$$

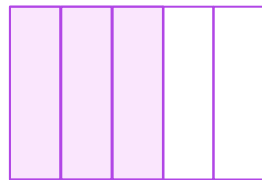


$$\frac{1}{4}$$

<

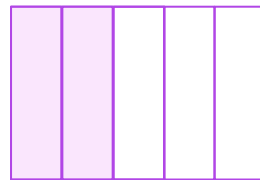


$$\frac{2}{4}$$



$$\frac{3}{5}$$

>



$$\frac{2}{5}$$

