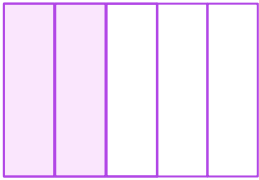


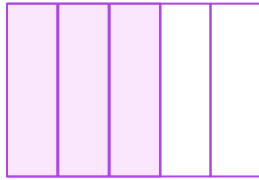
Is the Order Correct?

Mark check (✓) or cross (X) in the box to indicate whether the given order of fractions is correct or not.




$$\frac{2}{5}$$

>

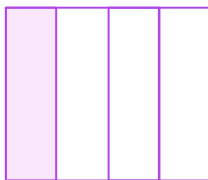


$$\frac{3}{5}$$

>



$$\frac{4}{5}$$



$$\frac{1}{4}$$

<

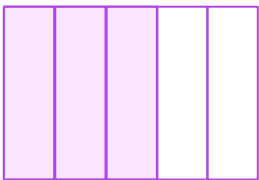


$$\frac{2}{4}$$

<

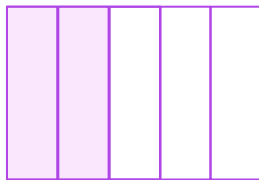


$$\frac{3}{4}$$



$$\frac{3}{5}$$

>



$$\frac{2}{5}$$

>



$$\frac{1}{5}$$

