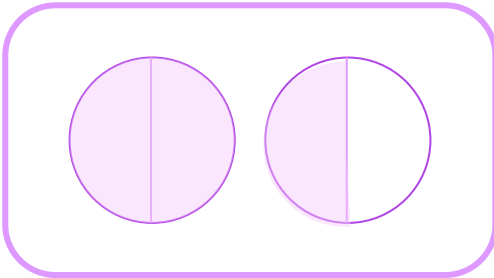



Choose the Correct Mixed Number

Circle the mixed number that each model represents.



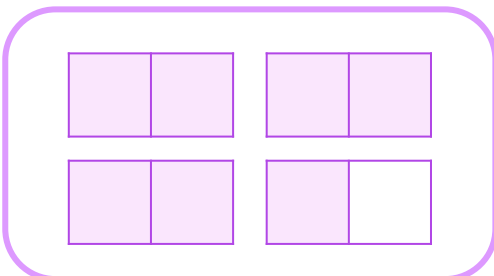
$1\frac{1}{3}$

$1\frac{1}{2}$



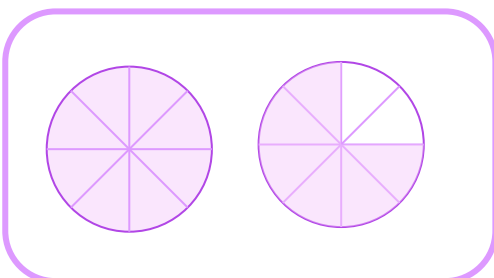
$1\frac{4}{6}$

$1\frac{10}{12}$



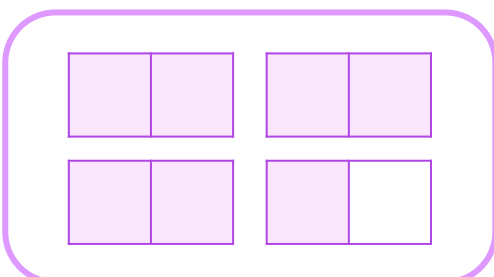
$2\frac{1}{2}$

$3\frac{1}{2}$



$2\frac{6}{8}$

$1\frac{4}{8}$



$3\frac{1}{2}$

$2\frac{1}{2}$

