



Addition & Subtraction Word Problems

Identify the problem type. Circle the correct operation.


There were 10 toys in the shop. 4 toys were sold. Circle the correct operation to find out how many are left in the shop.



There are 9 students in a class. 5 students went out of the class to play. Circle the correct operation to find out how many students are left in the class.



John found 4 shells on the sea beach in the morning. Then he found 3 more in the evening. Circle the correct operation to find out how many shells he found in all.



A packet contains 6 chocolate cookies. Mike ate 2 of the cookies. Circle the correct operation to find out how many cookies are left in the packet.

