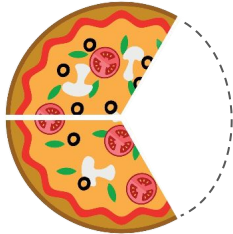


Choose the Fraction of Objects

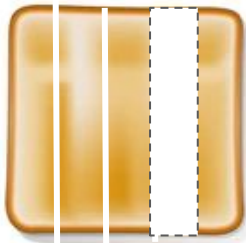
Circle the correct fraction to represent the leftover food in each picture.



$$\frac{2}{3}$$

$$\frac{1}{2}$$


$$\frac{3}{3}$$

$$\frac{2}{2}$$


$$\frac{2}{5}$$

$$\frac{4}{5}$$


$$\frac{5}{5}$$

$$\frac{5}{5}$$


$$\frac{5}{6}$$

$$\frac{4}{6}$$


$$\frac{6}{6}$$

$$\frac{6}{6}$$


$$\frac{2}{4}$$

$$\frac{4}{6}$$

$$\frac{4}{4}$$

$$\frac{6}{6}$$


$$\frac{2}{9}$$

$$\frac{7}{9}$$

$$\frac{9}{9}$$

$$\frac{9}{9}$$
