



Addition & Subtraction Word Problems

Identify the problem type. Circle the correct operation.


There were 30 toys in the shop. 24 toys were sold. Circle the correct operation to find out how many toys are left in the shop.



There were 29 students in a class. 5 students went out of the class to play. Circle the correct operation to find out how many students are left in the class.



John found 14 shells on the beach in the morning. Then he found 13 more shells in the evening. Circle the correct operation to find out how many shells he found in all.



A packet had 16 chocolate cookies. Mike ate 4 of the cookies. Circle the correct operation to find out how many cookies are left in the packet.

