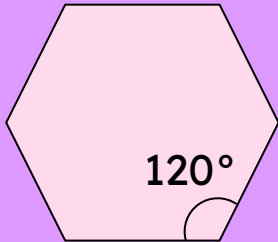


Different Types of Angles

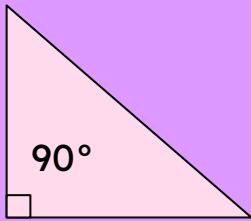
Identify the type of angle marked in each shape and tick the correct answer.



Acute

Right

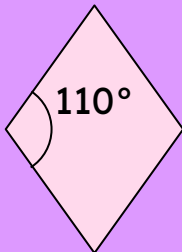
Obtuse



Acute

Right

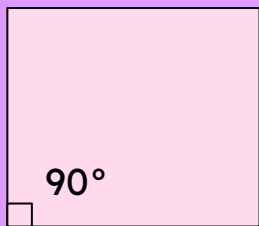
Obtuse



Acute

Right

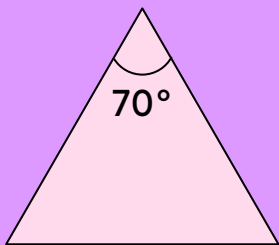
Obtuse



Acute

Right

Obtuse



Acute

Right

Obtuse

