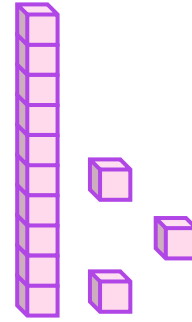

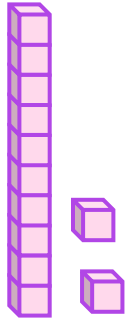


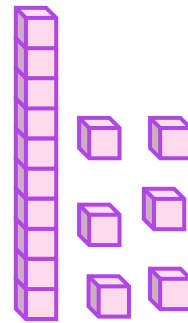

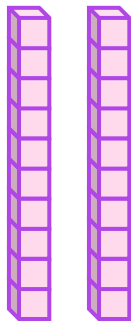
# Compare Using Place Value Blocks

Write the number each model represents  
and compare using  $>$ ,  $<$ , or  $=$ .



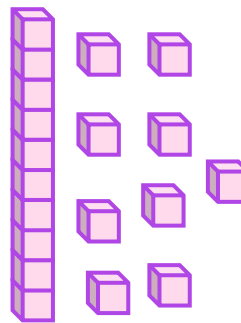

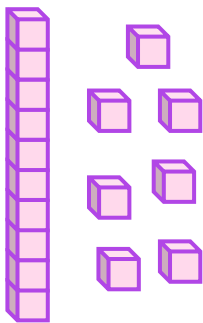
\_\_\_\_\_

\_\_\_\_\_



\_\_\_\_\_

\_\_\_\_\_



\_\_\_\_\_

\_\_\_\_\_

