


Compare Expressions


Solve the following numerical expressions using PEMDAS and then compare using $<$, $>$ or $=$.

$5 + 3 \times 2$




$9 + 5 - 2$

$8 \div 2 - 1$




$3 \times 2 + 4$

$4 \times 3 + 7$




$7 - 2 \div 2$

$10 - 2 \times 3$



$6 \div 2 + 4$

$5 + 2^2 + 6$



$2^2 + 6 \div 3$

