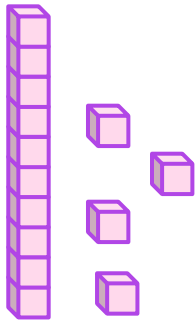
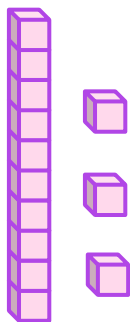
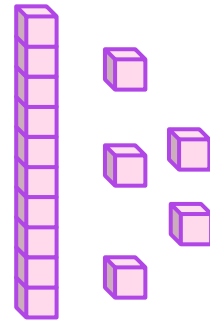


Compare Using Place Value Blocks

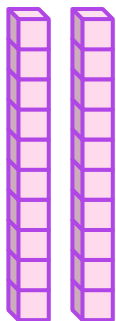
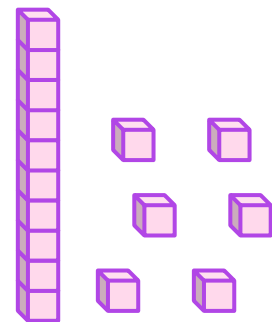
Compare the number represented by the given blocks by writing “more” or “less” in the given blanks.



is _____ than



is _____ than



is _____ than

