



Complete the Sentences (B)

Complete the multiplication and division sentences for the given models.




$$\boxed{3} \times \boxed{} = \boxed{9}$$

$$\boxed{9} \div \boxed{} = \boxed{3}$$



$$\boxed{2} \times \boxed{5} = \boxed{}$$

$$\boxed{10} \div \boxed{5} = \boxed{}$$



$$\boxed{4} \times \boxed{} = \boxed{}$$

$$\boxed{} \div \boxed{8} = \boxed{}$$