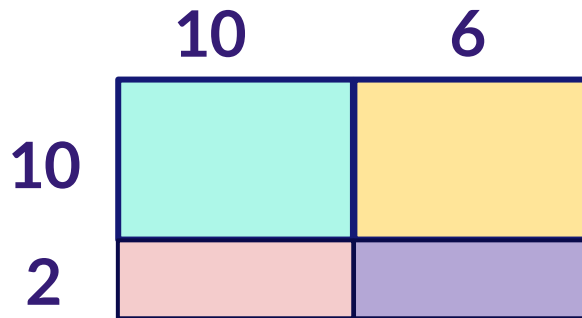


The Area Model

Complete the area model.

1

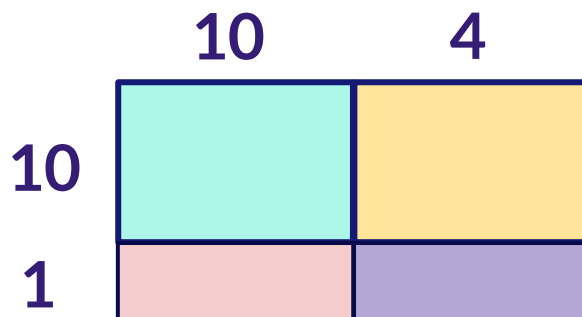
$$12 \times 16 =$$



$$\boxed{12 \times 16} = \boxed{} + \boxed{} + \boxed{} + \boxed{}$$

2

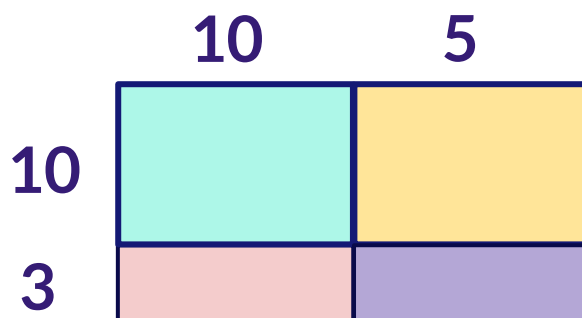
$$11 \times 14 =$$



$$\boxed{11 \times 14} = \boxed{} + \boxed{} + \boxed{} + \boxed{}$$

3

$$13 \times 15 =$$



$$\boxed{13 \times 15} = \boxed{} + \boxed{} + \boxed{} + \boxed{}$$