



How Many are Left



Count the objects and complete the subtraction sentence.





$$\boxed{4} - \boxed{2} = \boxed{}$$



$$\boxed{3} - \boxed{} = \boxed{}$$



$$\boxed{} - \boxed{1} = \boxed{}$$



$$\boxed{} - \boxed{} = \boxed{}$$