


NAME _____

Polygons

Count and write the number of sides in each polygon and write its name.




Number of sides: _____

Name: _____




Number of sides: _____

Name: _____




Number of sides: _____

Name: _____



Number of sides: _____

Name: _____



Number of sides: _____

Name: _____

