


Counting Sequence within 10

Fill the missing numbers to complete the sequence.


What comes after 2?



What comes before 3?




What comes after 6?



What comes before 5?



What comes after 8?



What comes before 4?

