



Let's Find the Total


Complete the addition statement.




$$\boxed{5} + \boxed{2} = \boxed{7}$$




$$\boxed{7} + \boxed{} = \boxed{}$$



$$\boxed{} + \boxed{} = \boxed{}$$



$$\boxed{} + \boxed{} = \boxed{}$$



$$\boxed{} + \boxed{} = \boxed{}$$