
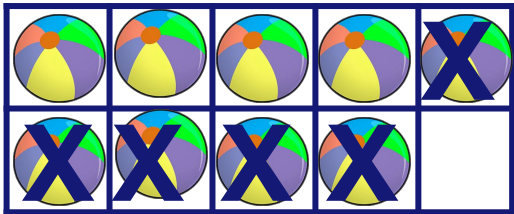


Let's Subtract

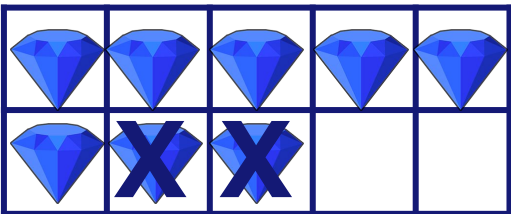
Complete the subtraction sentence.




$$\boxed{5} - \boxed{2} = \boxed{}$$




$$\boxed{9} - \boxed{5} = \boxed{}$$



$$\boxed{8} - \boxed{} = \boxed{}$$



$$\boxed{} - \boxed{} = \boxed{}$$



$$\boxed{} - \boxed{} = \boxed{}$$