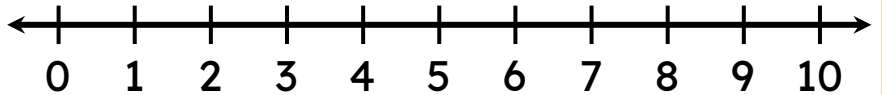


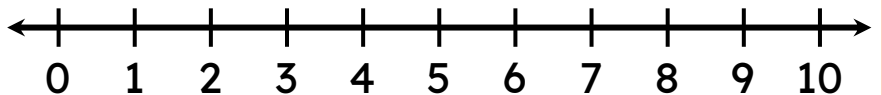
# Addition on a Number Line

Find the sum by drawing jumps on the number line.

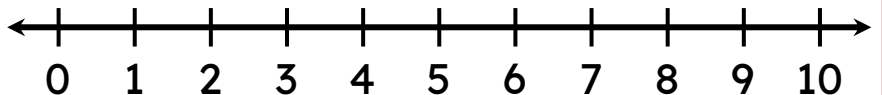
$2 + 3 = \square$



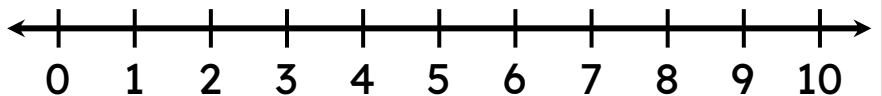
$7 + 1 = \square$



$5 + 2 = \square$



$6 + 3 = \square$



$2 + 4 = \square$

