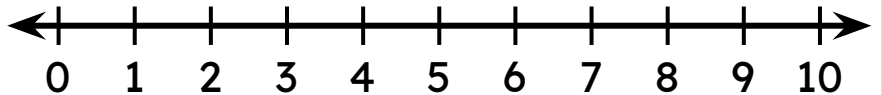


# Addition on a Number Line

Find the missing number by drawing jumps on the number line.

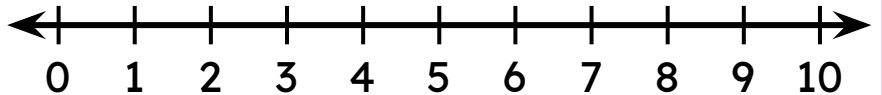
$$4 + \square = 6$$



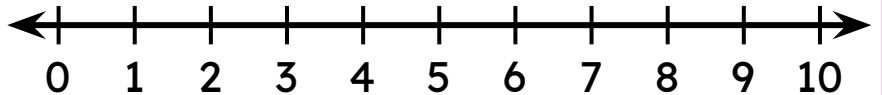
$$5 + \square = 8$$



$$3 + \square = 4$$



$$4 + \square = 9$$



$$2 + \square = 8$$

