

Analog Clocks

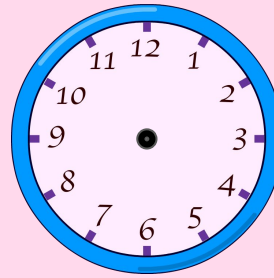
Draw hands on the clock to show the time one hour later.
Also, write the time.

Current Time

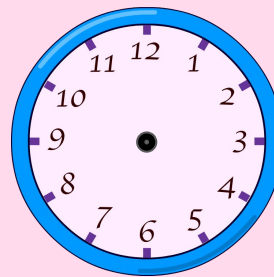


8 o'clock

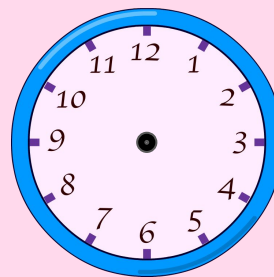
1 hour later



3 o'clock



Half past 12



Half past 6

