


# Equal or Not


Use “add using multiple of 10” strategy to add numbers and determine whether the expressions below are equal or not equal.

$35 + 17$




$38 + 20$

$56 + 25$




$60 + 21$

$99 + 23$




$100 + 22$

$91 + 32$



$90 + 31$

$87 + 43$



$90 + 40$

