


Equal or Not


Use “subtract using multiples of 10” strategy to subtract numbers and determine whether the expressions below are equal or not equal.

$35 - 17$




$32 - 20$

$56 - 22$




$54 - 20$

$99 - 33$




$96 - 30$

$91 - 49$



$90 - 50$

$87 - 29$



$88 - 30$

