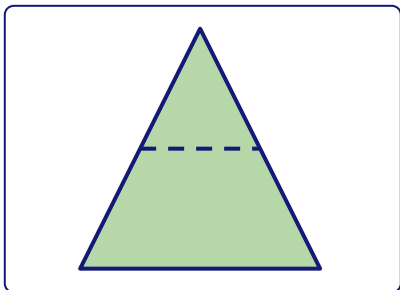


## Equal Parts

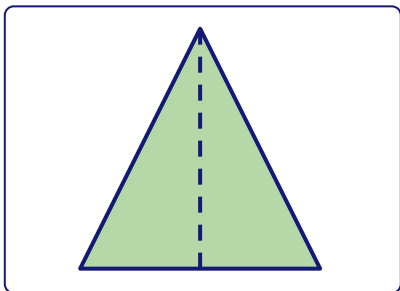
Identify if the shape is divided in equal parts.

If **Yes**, write "the number of equal parts". If **No**, write "NA".



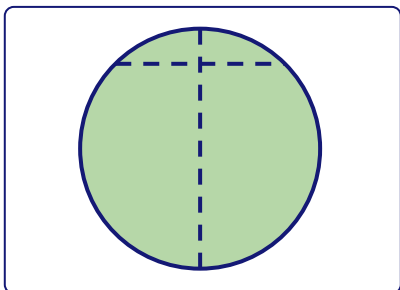
Are the parts equal? \_\_\_\_\_

Number of equal parts: \_\_\_\_\_



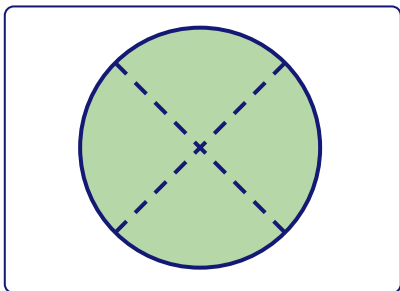
Are the parts equal? \_\_\_\_\_

Number of equal parts: \_\_\_\_\_



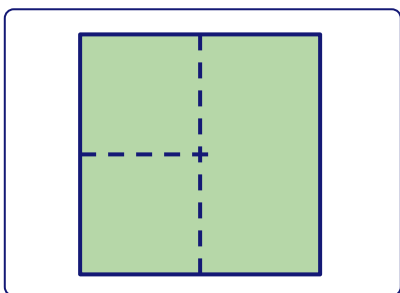
Are the parts equal? \_\_\_\_\_

Number of equal parts: \_\_\_\_\_



Are the parts equal? \_\_\_\_\_

Number of equal parts: \_\_\_\_\_



Are the parts equal? \_\_\_\_\_

Number of equal parts: \_\_\_\_\_