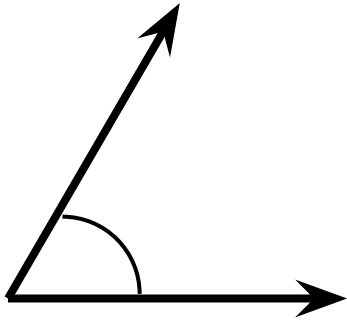
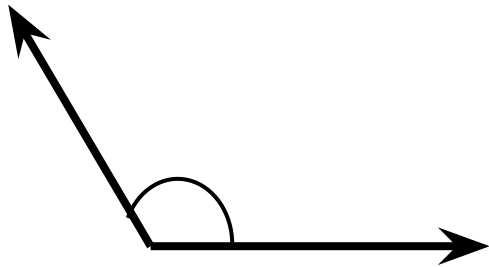


# Estimate the Angle

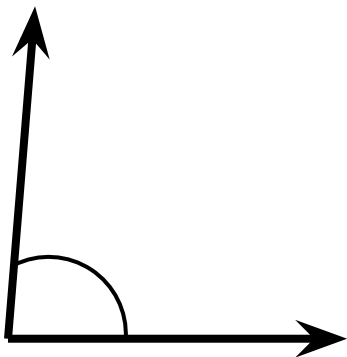
Circle the best estimate for the given angle measures.



- a.  $15^\circ$
- b.  $45^\circ$
- c.  $95^\circ$



- a.  $85^\circ$
- b.  $175^\circ$
- c.  $125^\circ$



- a.  $75^\circ$
- b.  $95^\circ$
- c.  $105^\circ$

