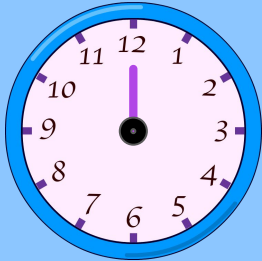
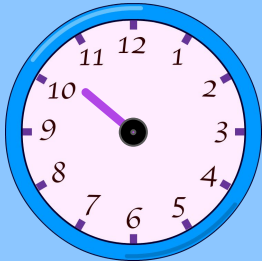
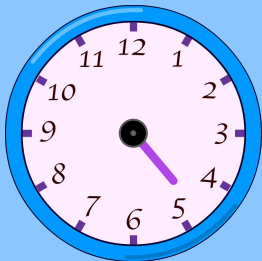
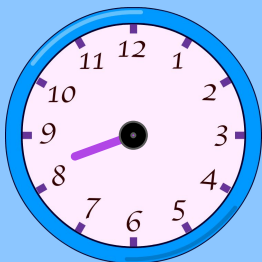
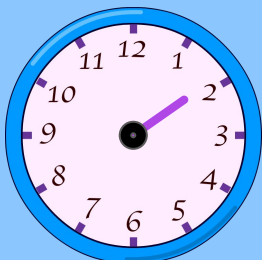


# Guess the Time

The given clocks have lost their minute hands. Guess the time using the hour hand and select the correct option.

 Almost 12 12 o'clock Little past 10 Almost 10 Almost 5 Little past 5 Almost 8 Little past 8 Almost 2 2 o'clock