


Facts of 0 and 1


Find the missing numbers and match the bees with the correct beehive.



$$6 \times _ = 6$$




$$0 \times 5 = _$$



$$0 \times 3 = _$$



$$7 \times _ = 0$$



$$_ \times 9 = 9$$

