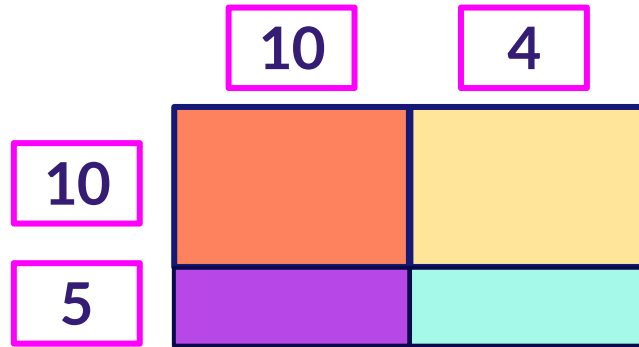


# The Area Model

Complete the area model.

1

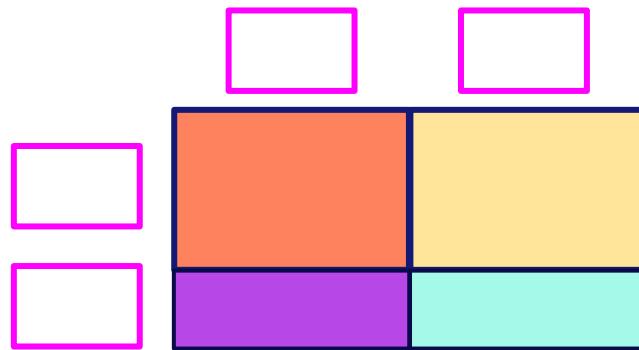
$$15 \times 14 =$$



$15 \times 14$	=		+		+		+	
----------------	---	--	---	--	---	--	---	--

2

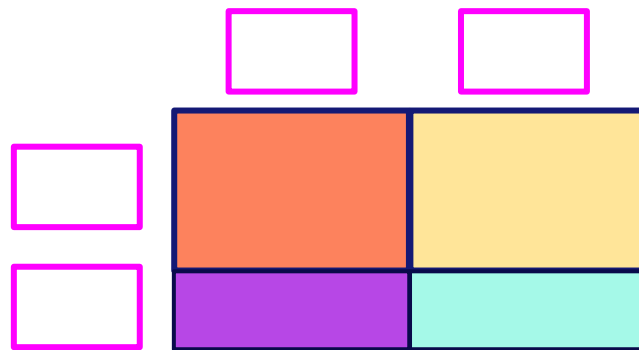
$$16 \times 15 =$$



$16 \times 15$	=		+		+		+	
----------------	---	--	---	--	---	--	---	--

3

$$18 \times 12 =$$



$18 \times 12$	=		+		+		+	
----------------	---	--	---	--	---	--	---	--