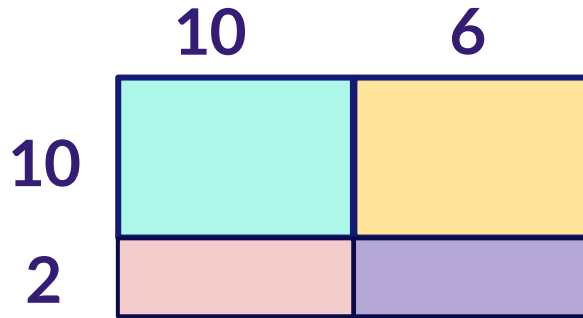


# The Area Model

Complete the area model.

1

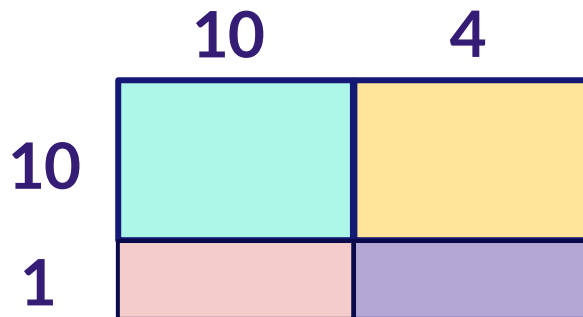
$$12 \times 16 =$$



$$12 \times 16 = \boxed{\phantom{0000}} + \boxed{\phantom{0000}} + \boxed{\phantom{0000}} + \boxed{\phantom{0000}}$$

2

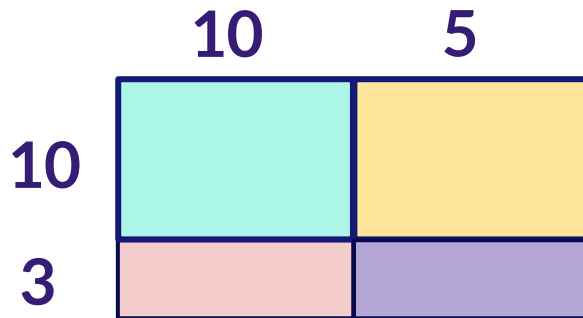
$$11 \times 14 =$$



$$11 \times 14 = \boxed{\phantom{0000}} + \boxed{\phantom{0000}} + \boxed{\phantom{0000}} + \boxed{\phantom{0000}}$$

3

$$13 \times 15 =$$



$$13 \times 15 = \boxed{\phantom{0000}} + \boxed{\phantom{0000}} + \boxed{\phantom{0000}} + \boxed{\phantom{0000}}$$