
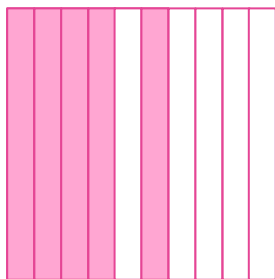


# Compare Decimals Using Models


For each of the following questions, write a decimal number greater than the number the model represents.




&lt;



&lt;



&lt;



&lt;

