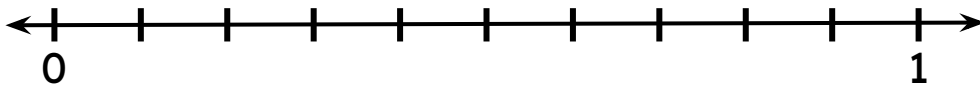


Find Equivalent Fractions

Find the equivalent fractions of the given fraction and using the number line and circle it.

Use the number line to find the fraction equivalent to $\frac{1}{5}$.

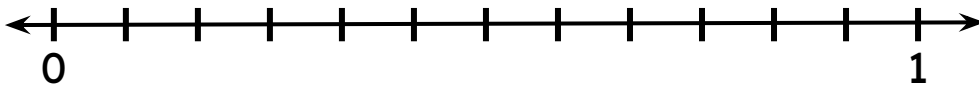


$$\frac{1}{10}$$

$$\frac{2}{10}$$

$$\frac{5}{10}$$

Use the number line to find the fraction equivalent to $\frac{1}{3}$.

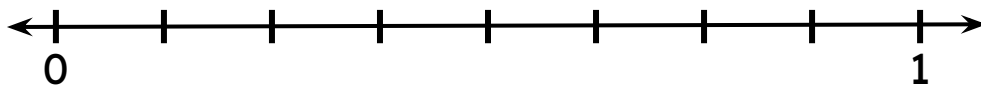


$$\frac{2}{12}$$

$$\frac{3}{12}$$

$$\frac{4}{12}$$

Use the number line to find the fraction equivalent to $\frac{4}{16}$.



$$\frac{1}{8}$$

$$\frac{2}{8}$$

$$\frac{4}{8}$$

