





Part-Part-Whole Model

Write the equation and find the answer.



There are 2 carrots and 4 mushrooms in a refrigerator. How many vegetables are there in total? Write the equation and find the answer.

	<input style="width: 40px; height: 20px;" type="text"/>	
		
<input style="width: 40px; height: 20px;" type="text"/> 2	<input style="width: 40px; height: 20px;" type="text"/> +	<input style="width: 40px; height: 20px;" type="text"/> 4
	<input style="width: 40px; height: 20px;" type="text"/> =	<input style="width: 40px; height: 20px;" type="text"/>

There are 4 red marbles and 5 green marbles. How many marbles are there altogether? Write the equation and find the answer.

	<input style="width: 40px; height: 20px;" type="text"/>	
		
<input style="width: 40px; height: 20px;" type="text"/>	<input style="width: 40px; height: 20px;" type="text"/> +	<input style="width: 40px; height: 20px;" type="text"/>
	<input style="width: 40px; height: 20px;" type="text"/> =	<input style="width: 40px; height: 20px;" type="text"/>

There are 5 blue gems and 3 green gems. How many gems are there in total? Write the equation and find the answer.

	<input style="width: 40px; height: 20px;" type="text"/>	
		
<input style="width: 40px; height: 20px;" type="text"/>	<input style="width: 40px; height: 20px;" type="text"/> +	<input style="width: 40px; height: 20px;" type="text"/>
	<input style="width: 40px; height: 20px;" type="text"/> =	<input style="width: 40px; height: 20px;" type="text"/>