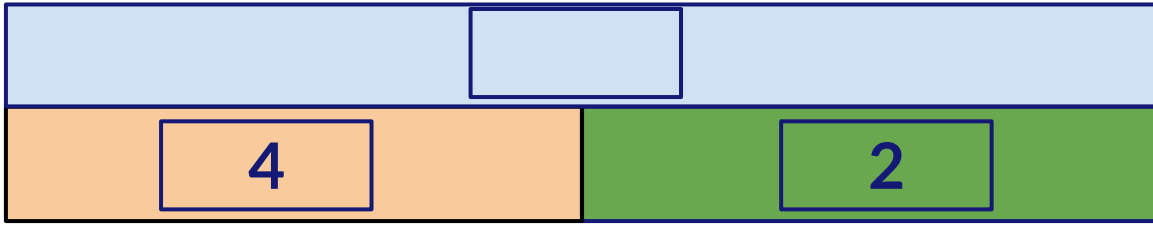


## Part-Part-Whole Model

Write the equation and find the answer.


Joey bought 4 apples and 2 kiwis from the market. How many fruits does he buy in all?  
Write the equation and find the answer.



+

=

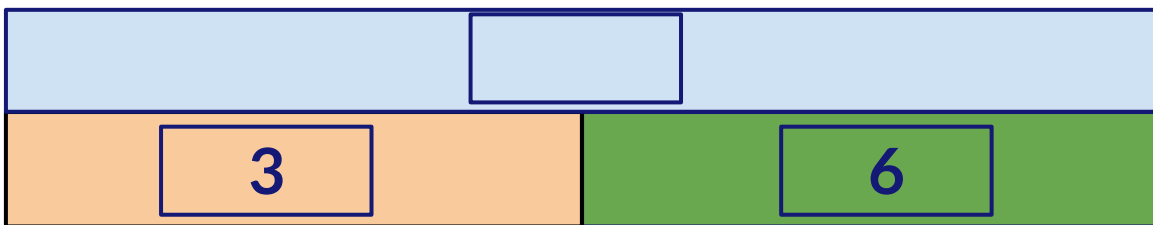
Emma bought 5 choco chip pastries and 4 white forest pastries from a bakery. How many pastries does she have altogether? Write the equation and find the answer.



+

=

There are 3 orange marbles and 6 green marbles. How many marbles are there in total?  
Write the equation and find the answer.



+

=