


Polygons

Count and write the number of sides and angles for each of the following irregular polygons.




Number of sides: _____

Number of angles: _____



Number of sides: _____

Number of angles: _____




Number of sides: _____

Number of angles: _____



Number of sides: _____

Number of angles: _____



Number of sides: _____

Number of angles: _____

