



Identify Fractions Greater Than 1

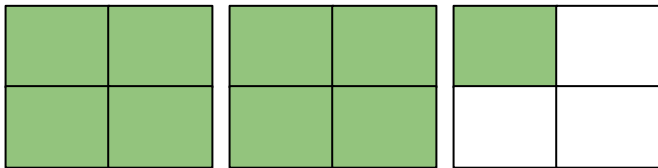
Write the fractions represented by the models. Circle the fraction that is greater than 1.




$$\frac{4}{3}$$




$$\frac{4}{6}$$




$$\frac{\quad}{\quad}$$



$$\frac{\quad}{\quad}$$



$$\frac{\quad}{\quad}$$



$$\frac{\quad}{\quad}$$