


Right Angles and Parallel Sides

Count and write the number of right angles and pairs of parallel sides each shape has.




Number of right angles:

Pairs of parallel sides:




Number of right angles:

Pairs of parallel sides:



Number of right angles:

Pairs of parallel sides:



Number of right angles:

Pairs of parallel sides:



Number of right angles:

Pairs of parallel sides:



Number of right angles:

Pairs of parallel sides:

