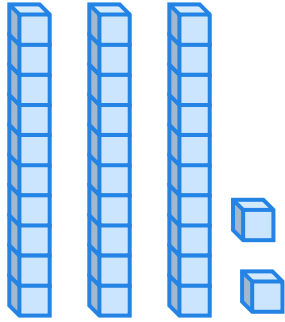
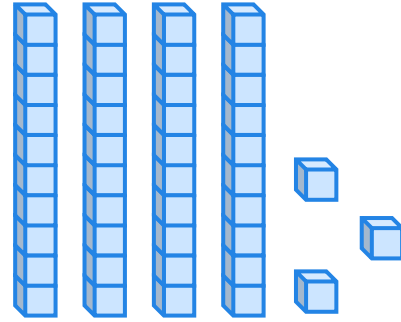


# Represent Numbers Using Blocks

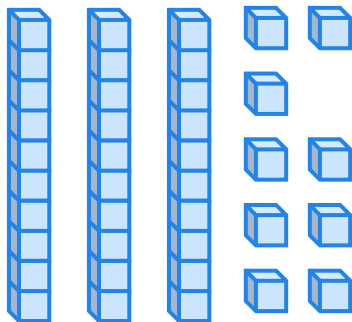
Write the number of tens and ones represented by each of the given models.



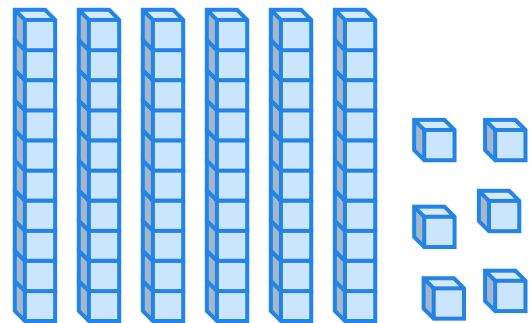
\_\_\_\_\_ tens \_\_\_\_\_ ones



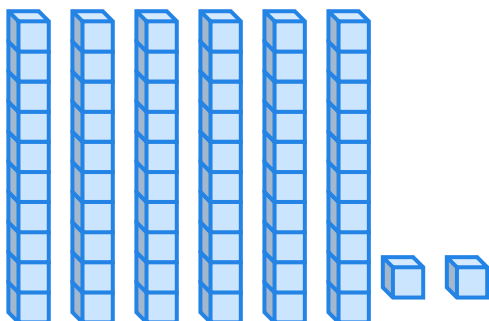
\_\_\_\_\_ tens \_\_\_\_\_ ones



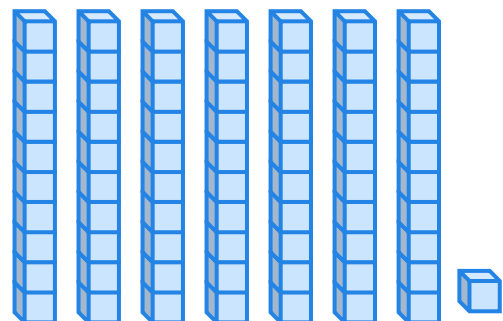
\_\_\_\_\_ tens \_\_\_\_\_ ones



\_\_\_\_\_ tens \_\_\_\_\_ ones



\_\_\_\_\_ tens \_\_\_\_\_ ones



\_\_\_\_\_ tens \_\_\_\_\_ ones

