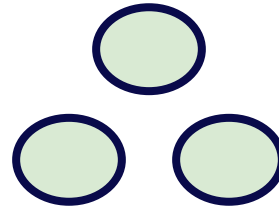
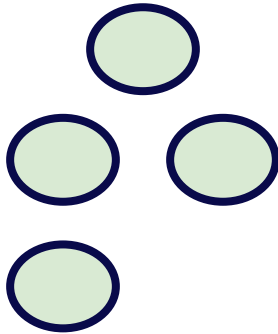


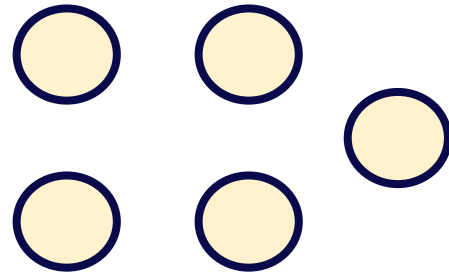
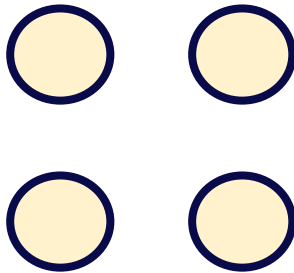
More or Less

Circle the correct set.

Circle the set that has 1 more than 3.



Circle the set that has 1 more than 4.



Circle the set that has 1 more than 2.

