



# Conversion of Metric Units

Color the circle green if the given conversion is correct else, color it red.


$3 \text{ kg} = 3,000 \text{ g}$




$9 \text{ m} = 900 \text{ cm}$




$5 \text{ m} = 50 \text{ cm}$




$2 \text{ L} = 2,000 \text{ m}$




$2 \text{ km} = 2,000 \text{ m}$




$5 \text{ L} = 500 \text{ mL}$




$7 \text{ L} = 7,000 \text{ mL}$




$1 \text{ m} = 100 \text{ cm}$




$8 \text{ m} = 800 \text{ mm}$



$14 \text{ kg} = 140 \text{ g}$



$4 \text{ kg} = 400 \text{ g}$



$3 \text{ m} = 3,000 \text{ mm}$

