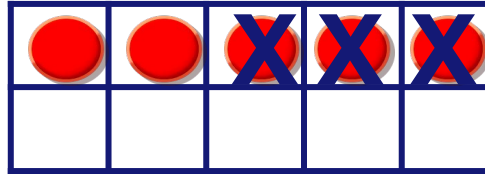


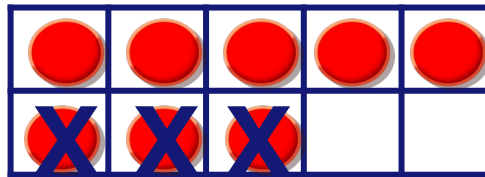
## Subtraction Sentence

Circle the subtraction sentence that matches with the picture shown.



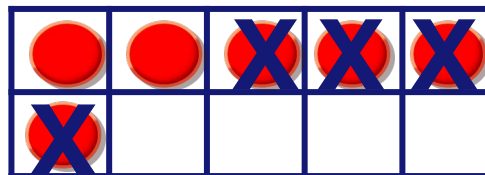
$$5 - 3 = 2$$

$$3 - 2 = 1$$



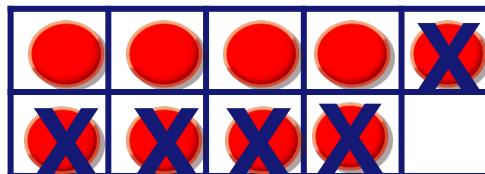
$$5 - 3 = 2$$

$$8 - 3 = 5$$



$$6 - 4 = 2$$

$$6 - 3 = 3$$



$$9 - 5 = 4$$

$$5 - 1 = 4$$