


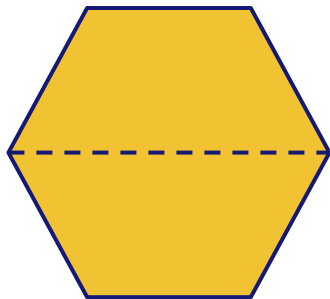
## Guess the Fraction

Each shape on the left represents a whole. Identify the fraction that the shape on the right represents.



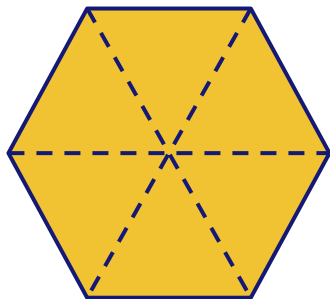
1




$$\frac{\square}{\square}$$


1



$$\frac{\square}{\square}$$


1



$$\frac{\square}{\square}$$